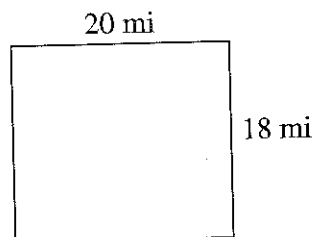
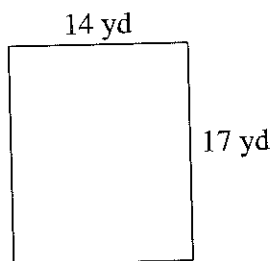

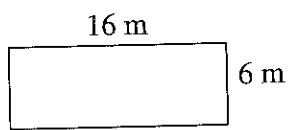
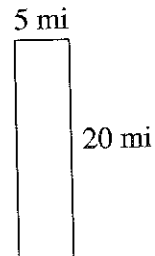
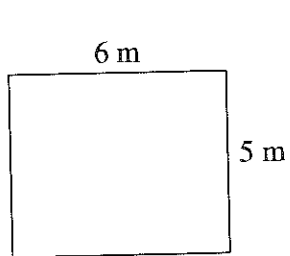


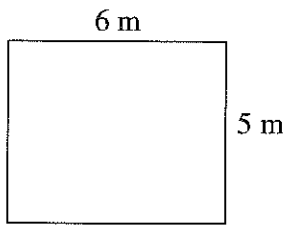
Area and Perimeter of Rectangles (A)

Find the perimeter of each rectangle.

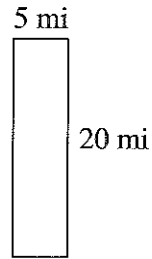


Perimeter of Rectangles (A) Answers

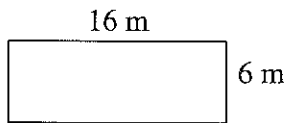
Find the perimeter of each rectangle.



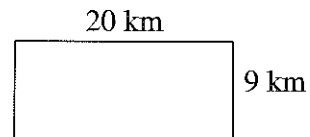
$$P = 22 \text{ m}$$



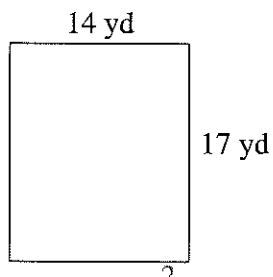
$$P = 50 \text{ mi}$$



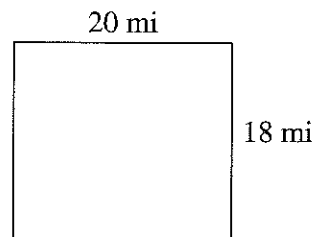
$$P = 44 \text{ m}$$



$$P = 58 \text{ km}$$



$$P = 62 \text{ yd}$$



$$P = 76 \text{ mi}$$